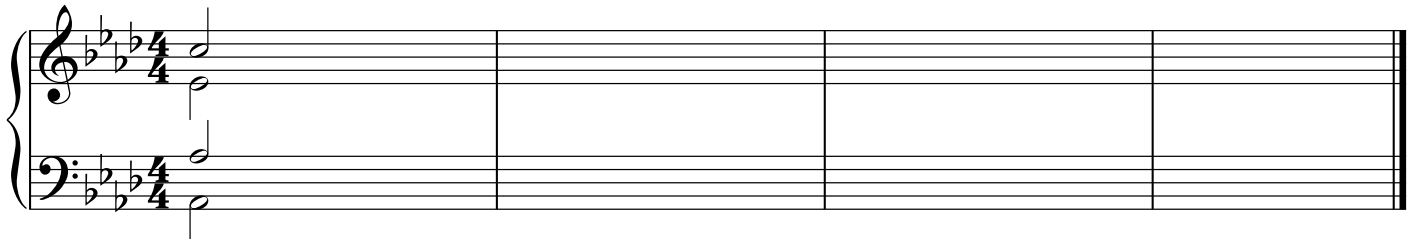


Harmonic Quiz No. 1

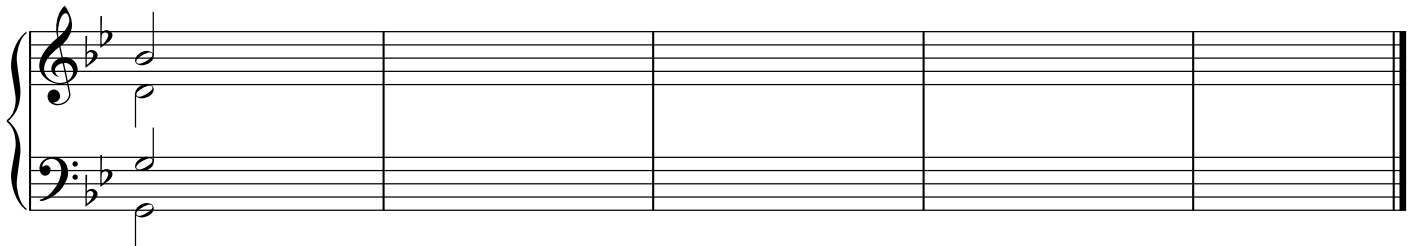
Transcribe the bass and melody from the recording, then through deduction and process of elimination, add chord symbols and roman numerals. When you are finished, go back and write inner voices (all inner voice motion in these examples is stepwise with the single exception of one leap of a 3rd in one example only). Be aware that several of these examples contain mode mixture.

Ex. 1



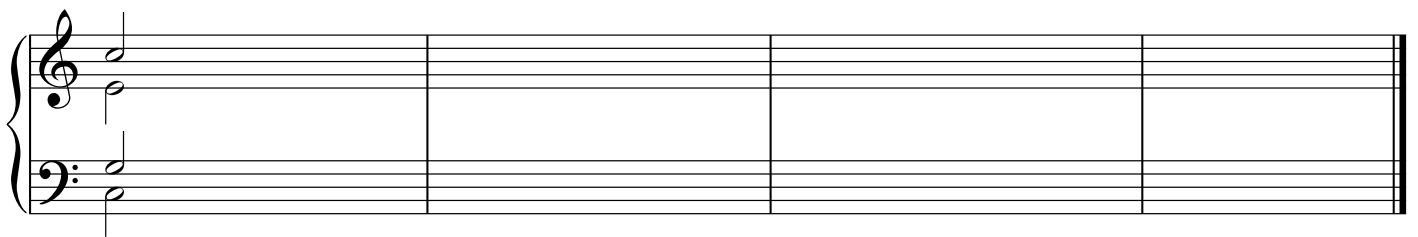
Musical notation for Example 1, showing a grand staff with treble and bass clefs. The key signature is three flats (B-flat, E-flat, A-flat) and the time signature is 4/4. The first measure contains a melody in the treble clef (G4) and a bass line in the bass clef (G3). The rest of the staff is empty.

Ex. 2




Musical notation for Example 2, showing a grand staff with treble and bass clefs. The key signature is three flats (B-flat, E-flat, A-flat). The first measure contains a melody in the treble clef (G4) and a bass line in the bass clef (G3). The rest of the staff is empty.

Ex. 3



Musical notation for Example 3, showing a grand staff with treble and bass clefs. The key signature is three flats (B-flat, E-flat, A-flat). The first measure contains a melody in the treble clef (G4) and a bass line in the bass clef (G3). The rest of the staff is empty.

Ex. 4



Musical notation for Example 4, showing a grand staff with treble and bass clefs. The key signature is three sharps (F-sharp, C-sharp, G-sharp). The first measure contains a melody in the treble clef (F#4) and a bass line in the bass clef (F#3). The rest of the staff is empty.