

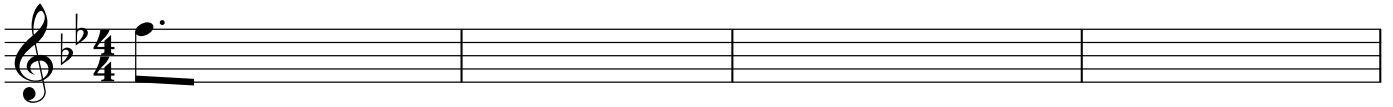
Melodic Quiz No. 1

Fitzgerald/Theory III


Name: _____

Listen to the audio tracks and transcribe the melodies that you hear. Examples 3 and 5 contain a lot of smaller rhythmic divisions, so be sure to write small enough to allow the contents of each measure to fit into the space provided.

Ex. 1





Ex. 2



Ex. 3



Ex. 4



Ex. 5

