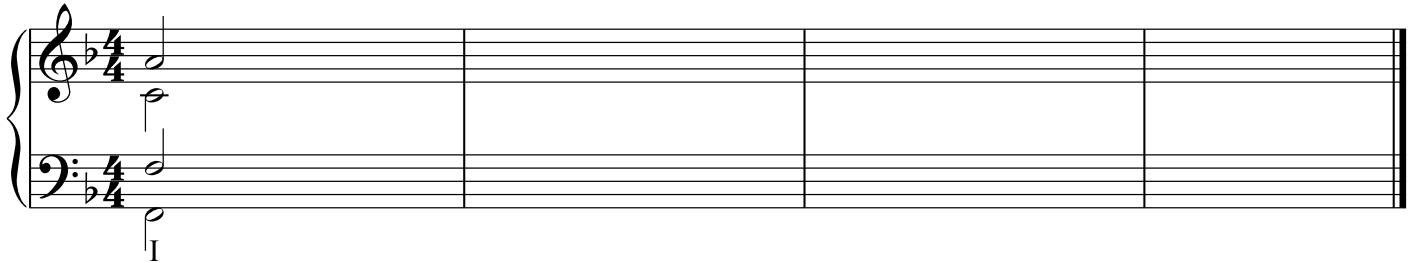


Harmonic Quiz No. 1


Transcribe the bass and melody from the recording, then through deduction and process of elimination, add chord symbols and roman numerals. When you are finished, go back and write inner voices (all inner voice motion in these examples is stepwise with the single exception of one leap of a 3rd in one example only). Be aware that several of these examples contain mode mixture.

Ex. 1



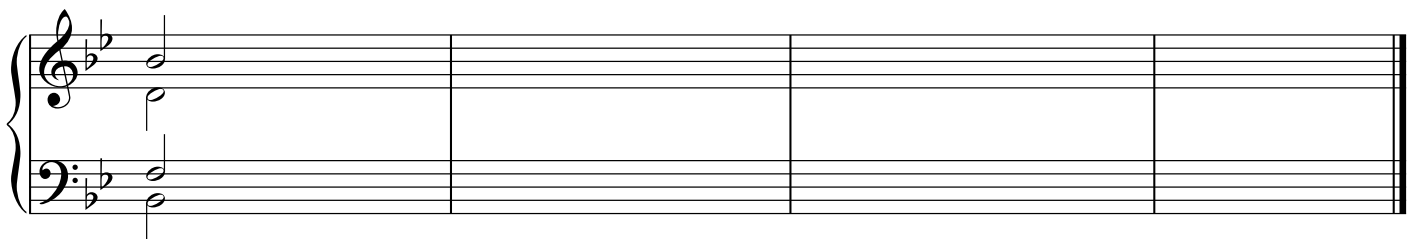
Musical notation for Example 1, showing a grand staff with treble and bass clefs, 4/4 time signature, and a key signature of one flat (B-flat). The notation is partially filled in the first measure, with a bass clef and a single note (B-flat) in the bass line. The rest of the staff is empty.

Ex. 2




Musical notation for Example 2, showing a grand staff with treble and bass clefs, 4/4 time signature, and a key signature of two sharps (D major). The notation is partially filled in the first measure, with a treble clef and a single note (D) in the treble line, and a bass clef and a single note (D) in the bass line. The rest of the staff is empty.

Ex. 3



Musical notation for Example 3, showing a grand staff with treble and bass clefs, 4/4 time signature, and a key signature of two flats (B-flat major). The notation is partially filled in the first measure, with a treble clef and a single note (B-flat) in the treble line, and a bass clef and a single note (B-flat) in the bass line. The rest of the staff is empty.

Ex. 4



Musical notation for Example 4, showing a grand staff with treble and bass clefs, 4/4 time signature, and a key signature of one flat (B-flat major). The notation is partially filled in the first measure, with a treble clef and a single note (B-flat) in the treble line, and a bass clef and a single note (B-flat) in the bass line. The rest of the staff is empty.